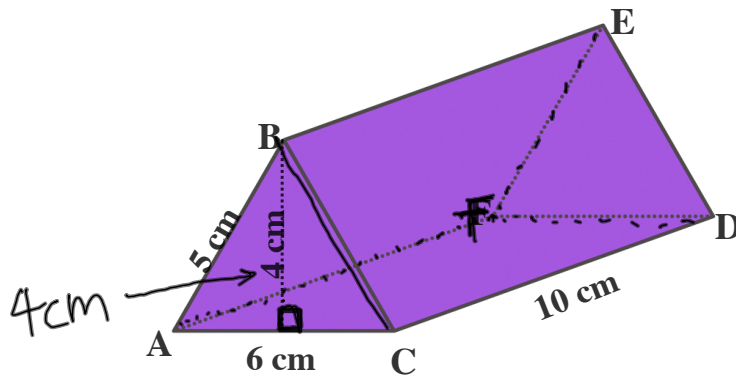


Name the edges that intersect \overline{AB} $\overline{AD}, \overline{AE}, \overline{BE}, \overline{BC}$

Name the edges that are parallel to \overline{AB} \overline{DC}



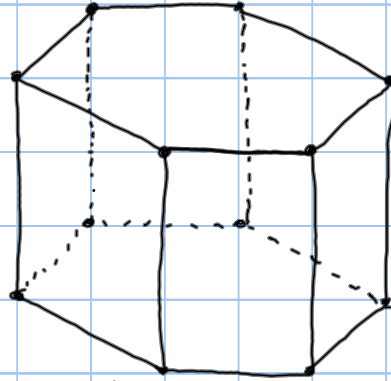
Name the edges that intersect \overline{AB} $\overline{AF}, \overline{AC}, \overline{BE}, \overline{BC}$

Name the edges that are parallel to \overline{AB} \overline{EF}

Drawing Three-Dimensional Figures



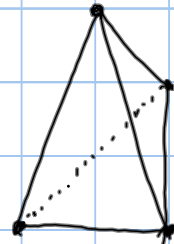
Rectangular
Prism



Hexagonal
Prism



Triangular
Prism



Triangular
Pyramid

Assignment

7th Grade Lesson 7-1b

Pgs. 254-255 #12-14, 17-23 all

